



**SIDDHARTH GROUP OF INSTITUTIONS :: PUTTUR
(AUTONOMOUS)**

Siddharth Nagar, Narayanavanam Road – 517583

QUESTION BANK (DESCRIPTIVE)

Subject with Code : NETWORK THEORY(18EE0242)

Course & Branch: B.Tech - ECE

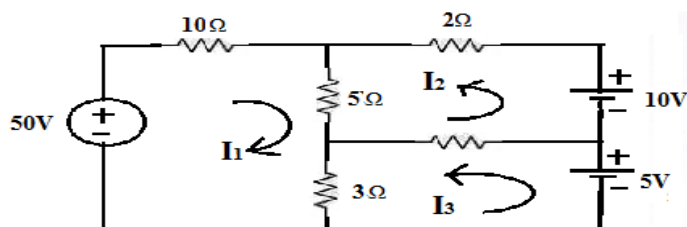
Year & Sem: II-B.Tech & I-Sem

Regulation: R18

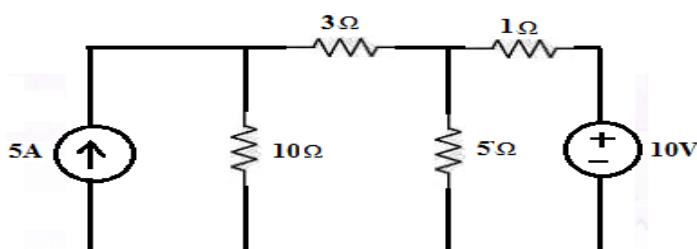
UNIT –I

CIRCUIT ANALYSIS TECHNIQUES

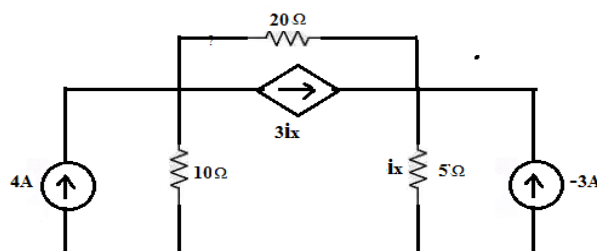
1. a) Explain about Nodal analysis and write the steps for applying nodal analysis. [5M]
- b) Determine the mesh currents for the following network. [5M]



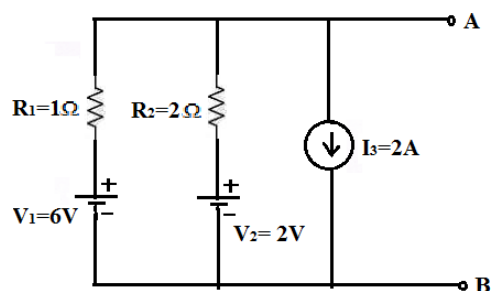
2. a) Explain about Mesh analysis and write the steps for writing mesh analysis. [5M]
- b) Determine the current in 10Ω resistor for the following network by using nodal analysis. [5M]



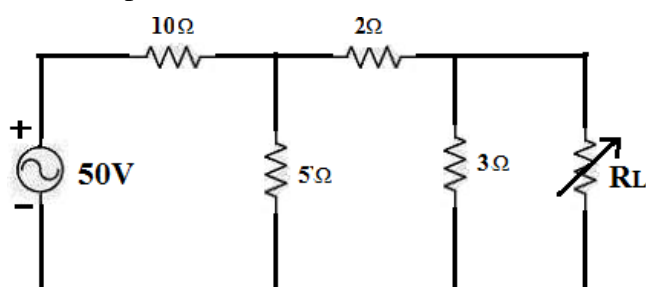
3. a) Determine i_x for the following network. [5M]



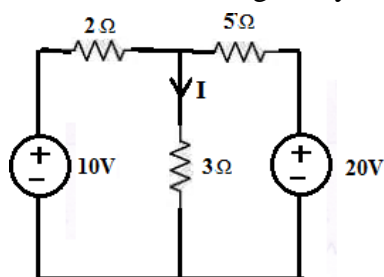
- b) Explain about source transformation briefly. [5M]
4. a) State and prove Tellegen's theorem. [5M]
- b) Determine the equivalent current source between the terminals A and B. [5M]



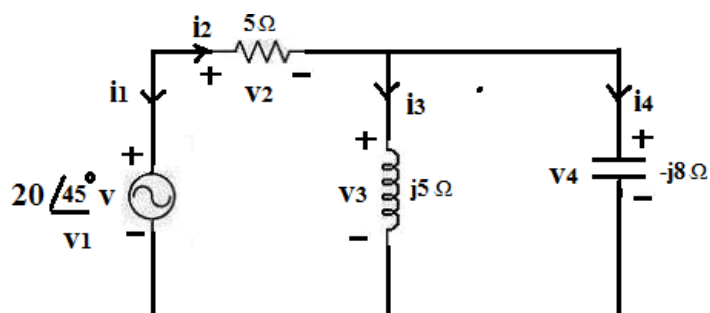
5. a) State and prove Reciprocity theorem. [5M]
 b) Determine the maximum power delivered to the load in the circuit shown in below figure. [5M]



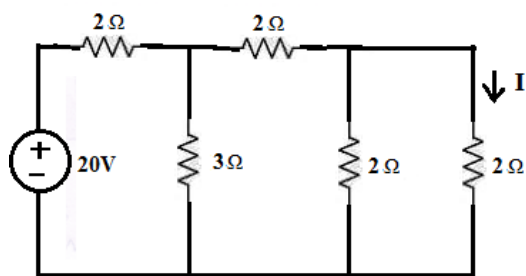
6. a) State and prove Maximum power transfer theorem. [5M]
 b) Calculate the current „I” shown in below figure by using Milliman’s theorem. [5M]



7. a) State and prove Compensation theorem. [5M]
 b) Verify Tellegen’s theorem for the circuit shown in below figure. [5M]

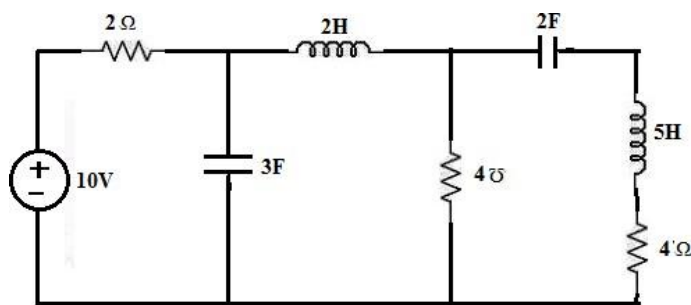


8. a) State and prove Milliman’s theorem. [5M]
 b) Verify reciprocity theorem for the network shown in below figure. [5M]

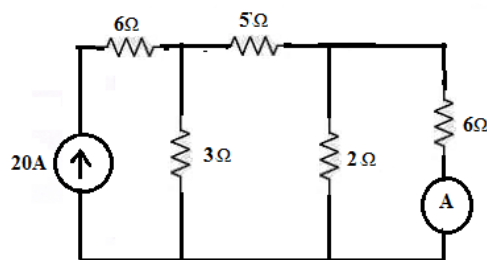


9. a) Draw the dual circuit of the figure shown below.

[5M]



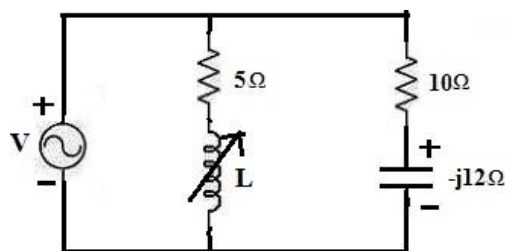
b) Determine the ammeter reading where it is connected to 6Ω resistor as shown in below figure. The internal resistance of the ammeter is 2Ω .,by using compensation theorem. [5M]



10. a) Define Duality & Dual networks.
- b) Define Super node and Super mesh.
- c) Write statement of Reciprocity theorem.
- d) Write statement of Tellegen's theorem.
- e) Write the procedure to obtain Dual network.

UNIT-II RESONANCE AND FILTERS

1. a) A series RLC circuit has $R=10\Omega$, $L=0.1\text{H}$ and $C=50\mu\text{F}$. The applied voltage is 100V. Find Resonant frequency & Quality factor of a coil. [5M]
- b) Explain about Series resonance with phasor diagrams. [5M]
2. a) Explain about Parallel resonance with phasor diagrams. [5M]
- b) Find the value of „L” at which the circuit resonates at a frequency of 1000 rad/sec in the circuit shown in figure. [5M]

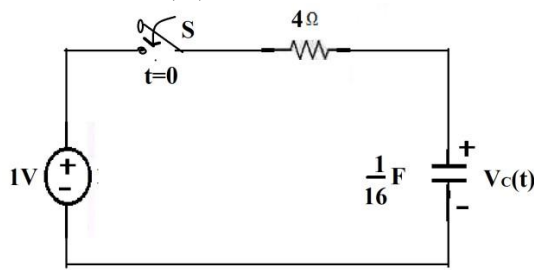


3. a) Explain about Quality factor and Band-width of Series resonance. [5M]
- b) Design constant-K band pass filter having a design impedance of 500Ω and cut-off frequencies $f_1=1\text{kHz}$ and $f_2=10\text{kHz}$. [5M]
4. a) Design a High –pass filter having a cut-off frequency of 1kHz with a load resistance of 600Ω .
- b) Design a Band-elimination filter having design impedance of 600Ω and cut-off frequencies $f_1=2\text{kHz}$ and $f_2=6\text{kHz}$. [5M]
5. a) Explain about classification of filters.
- b) Explain about Propagation constant and Characteristic impedance in T-network filters. [5M]
6. a) Explain about Propagation constant and Characteristic impedance in Π -network filters. [5M]
- b) Design Low Pass Filter in both T & Π section having a cut off frequency of 2KHz to operate with a terminated load resistance of 500Ω [5M]
7. Explain about Constant-K low-pass filter in detail. [10M]
8. Explain about Constant-K high-pass filter in detail. [10M]
9. Explain about Constant-K band -pass filter in detail. [10M]
10. a) Define Quality-factor and Selectivity. [2*5=10M]
- b) Define Neper and Decibel.
- c) Draw the block diagram of band-pass and band-elimination filters.
- d) Draw the characteristics of Low-pass and High-pass filters.
- e) Define Resonance and Resonant frequency.

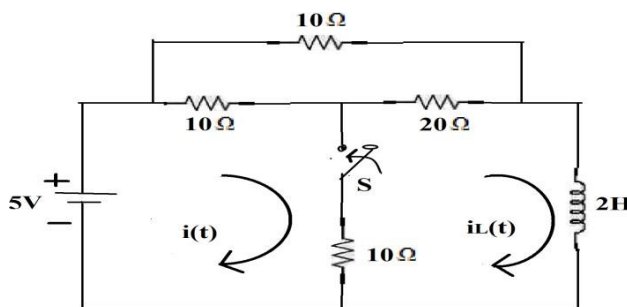
UNIT-III

TRANSIENT ANALYSIS

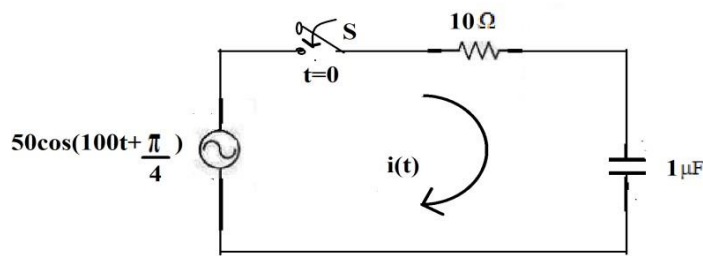
1. a) Derive the Transient Response of series RL-circuit with D.C excitation. [6M]
- b) Using classical method of solution of differential equations, find the value of $V_c(t)$ for $t > 0$ in the circuit shown in figure. Assume $V_c(0^-) = 9\text{V}$. [4M]



2. a) Derive the Transient Response of series RC-circuit with D.C excitation. [5M]
- b) The circuit shown in below figure, the switch „S“ is open and the circuit reaches a steady state. At $t=0$, the „S“ is closed. Find the current in the inductor for $t > 0$. [5M]



3. Derive the Transient Response of series RLC-circuit with D.C excitation. [10M]
4. a) Derive the Transient Response of Series RL with Pulse excitation. [5M]
- b) A series RC circuit consists of a resistor of 10Ω and capacitor of 0.1 F with a constant voltage of 20V , is applied to the circuit at $t=0$. Obtain the current equation. Determine the voltage across the resistor and the capacitor. [5M]
5. Derive the Transient Response of Series RL circuit with Sinusoidal excitation. [10M]
6. a) In the circuit shown in figure, determine the complete solution for the current when switch is closed at $t=0$, applied voltage is $V(t) = 50 \cos(100t + \pi/4)$, resistance $R = 10\Omega$ and capacitance $C = 1\mu\text{F}$. [5M]



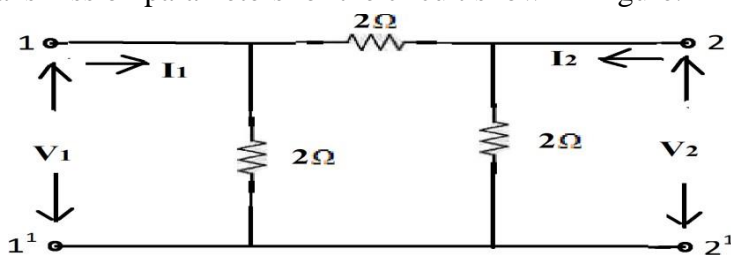
- b) A voltage $V = 300 \sin(314t)$ is applied at $t = 2.14\text{ msec}$ to a series RC circuit having resistance of 10Ω and a capacitance of $200\mu\text{F}$. Find an expression for current. Also, find the value of current 1 msec after Switching-On. [5M]
7. Derive the Transient Response of Series RLC circuit with Sinusoidal excitation. [10M]

8. a) Derive the Transient Response of Series RC circuits with Pulse excitation. [5M]
 b) A series RL circuit with $R=30\Omega$ and $L=15H$ has a constant voltage $V=60V$ applied at $t=0$.
 Determine the current "I", voltage across resistor and voltage across inductor. [5M]
9. Derive the Transient Response of Series RC circuit with A.C excitation. [10M]
10. a) Define steady state and transient state [2*5=10M]
 b) What are the initial conditions? Explain briefly.
 c) What is the transient response of series RL and RC circuits with D.C excitation?
 d) What is the behavior of Inductor in Initial and Steady state conditions?
 e) What is the behavior of Capacitor in Initial and Steady state conditions?

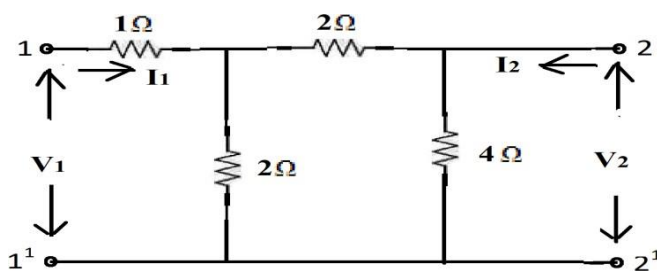
UNIT-IV

TWO PORT NETWORKS

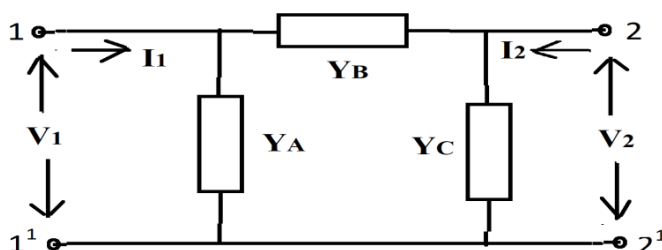
1. a) Explain about Impedance parameters. [5M]
 b) Find the transmission parameters for the circuit shown in figure. [5M]



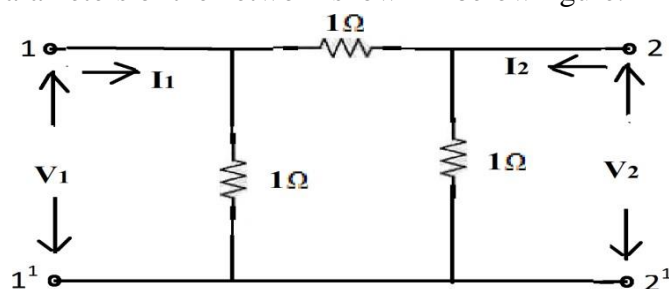
2. a) Explain about short-circuit parameters. [5M]
 b) Find the h-parameters of the network shown in figure. [5M]



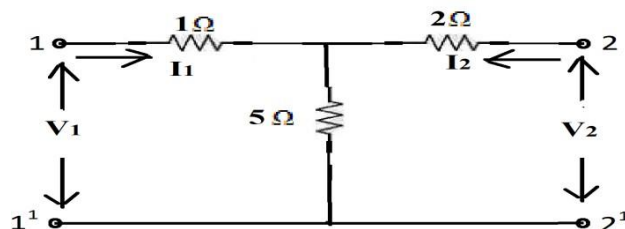
3. a) Explain about h-parameters in terms of y-parameters. [5M]
 b) Find the Short-circuit parameters for the circuit shown in figure. [5M]



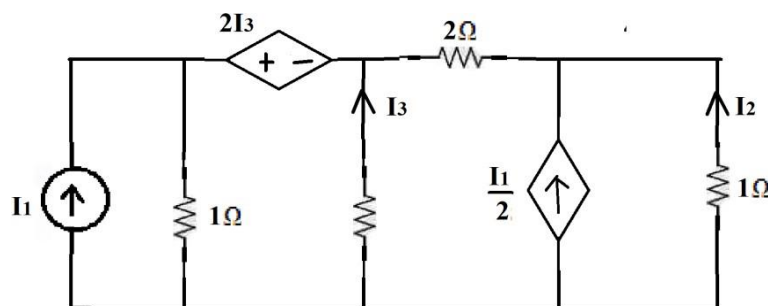
4. a) Explain about ABCD-parameters. [5M]
 b) Find the Z-parameters of the network shown in below figure. [5M]



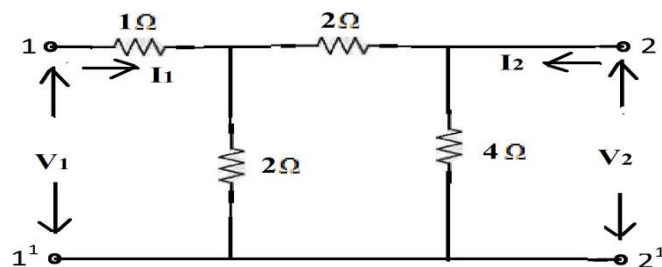
5. a) Derive the expressions for Chain parameters in terms of Z-parameters. [4M]
 b) The Z-parameters of a two-port network are $Z_{11} = 10\Omega$, $Z_{22} = 15\Omega$, $Z_{12} = 5\Omega$ and $Z_{21} = 5\Omega$. Find the equivalent T-network and ABCD parameters. [6M]
 6. a) Find the transmission parameters for the circuit shown in figure. [5M]



- b) The hybrid parameters of a two-port network is shown in figure are, $h_{11} = 1K$, $h_{12} = 0.003$, $h_{21} = 100$ and $h_{22} = 50\mu S$. Find V_2 and Z-parameters of the network. [5M]
 7. a) Derive the expressions for Z-parameters in terms of ABCD-parameters. [5M]
 b) Find the current transfer ratio I_2/I_1 for the network shown on figure. [5M]



8. a) Derive the expressions for Y-parameters in terms of ABCD parameters. [5M]
 b) Determine the y-parameters of the following network. [5M]

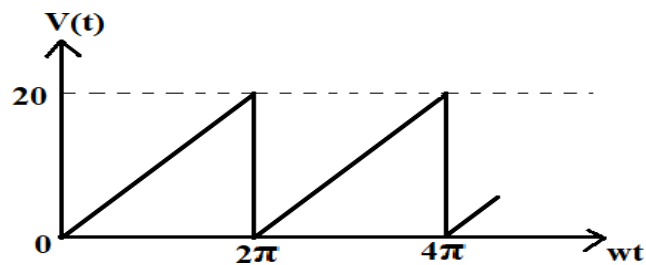


9. a) The given ABCD parameters are, $A=2$, $B=0.9$, $C=1.2$, $D=0.5$. Find Y-parameters. [5M]
 b) The given Y-parameters are, $Y_{11}=0.5$, $Y_{12}=Y_{21}=0.6$, $Y_{22}=0.9$. Find Impedance parameters. [5M]
 10. a) Define Two-port network. [2*5=10M]

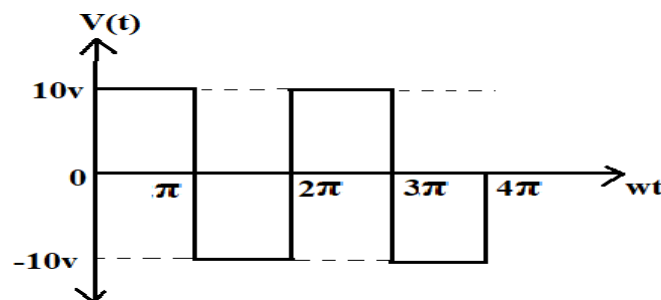
- b) Draw the equivalent circuit of Z-parameters.
- c) What is the condition for Symmetry in Z and Y parameters?
- d) What is the condition for Reciprocity in Z and Y parameters?
- e) Write the equations for Z-parameters in terms of Y-parameters.

UNIT-V FOURIER TRANSFORMS

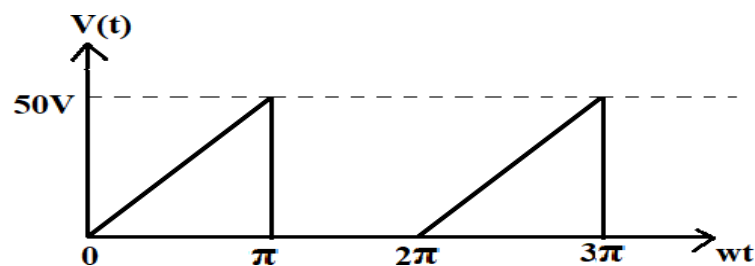
1. a) Derive the Trigonometric form of Fourier series. [5M]
- b) Find the Fourier series for the following waveform. [5M]



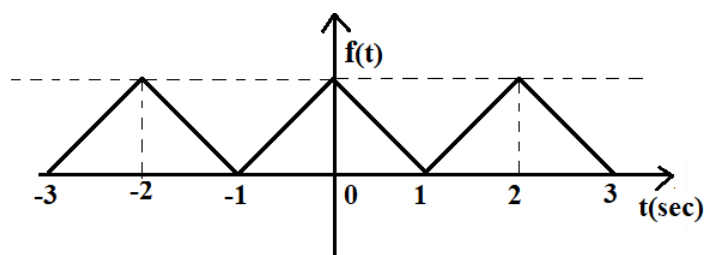
2. a) Derive the Exponential form of Fourier series. [5M]
- b) Obtain the Fourier series for the following waveform shown in figure. [5M]



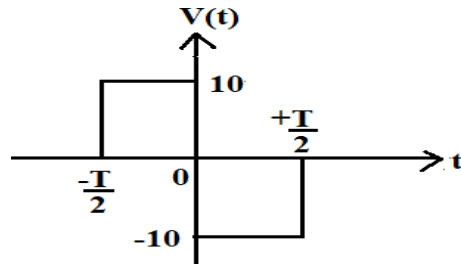
3. a) Find the Trigonometric Fourier series for the following waveform shown in figure. [5M]



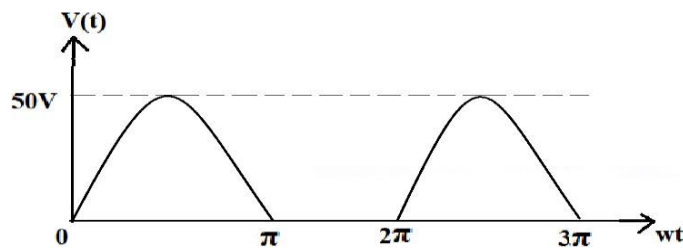
- b) Find the Exponential Fourier series for the following waveform shown in figure. [5M]



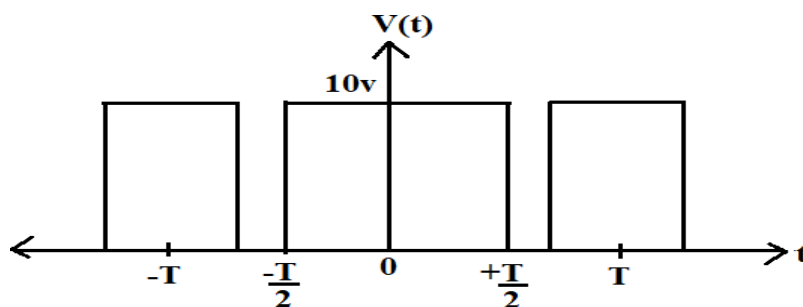
4. Write and prove the properties of Fourier transforms. [10M]
 5. a) Explain about Line spectrum and Phase spectrum. [6M]
 b) Obtain the magnitude and phase spectrum of the waveform shown in figure. [4M]



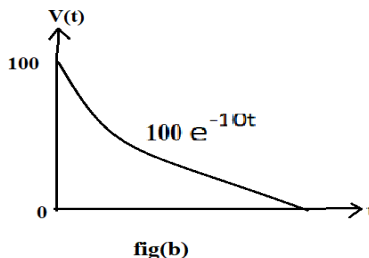
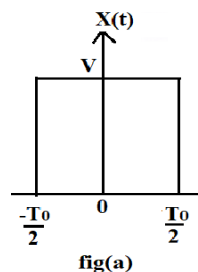
6. a) Find the Trigonometric Fourier series for the waveform shown in figure and sketch the spectrum. [6M]



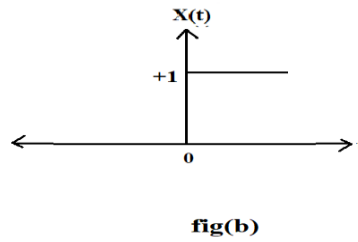
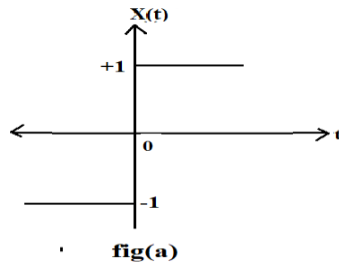
- b) Find the Fourier transform of a periodic pulse train shown in figure. [5M]



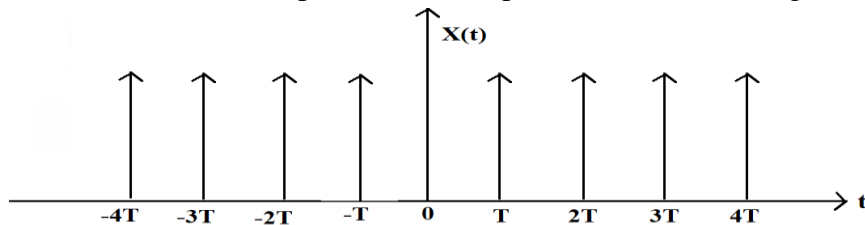
7. Determine the Fourier transforms of the following waveforms shown in figure(a) and figure(b). [10M]



8. Determine the Fourier transforms of the following waveforms shown in figure (a) and figure (b). [10M]



9. a) Find the Fourier Transform of a periodic unit impulse train shown in figure [5M]



- b) Explain about waveform symmetry for even and odd functions. [5M]
10. a) Define Fourier series. [2*5=10M]
- b) Define Fourier transform.
- c) Write the expression for trigonometric form of Fourier series.
- d) Write the expression for exponential form of Fourier series.
- e) Write any two properties of Fourier transforms.

Prepared By
R SIVA & M.KALAIVANI


SIDDHARTH GROUP OF INSTITUTIONS :: PUTTUR

Siddharth Nagar, Narayanavanam Road – 517583

QUESTION BANK (OBJECTIVE)
Subject with Code : NETWORK THEORY(18EE0242)
Course & Branch: B.Tech – ECE
Year & Sem: II-B.Tech& I-Sem
Regulation: R18
UNIT –I
CIRCUIT ANALYSIS TECHNIQUES

1. The Reciprocity theorem is applicable to []
 (A) Linear networks only (B) Linear/Bilateral networks
 (C) Bilateral networks only (D) Neither of the two
2. Compensation theorem is applicable to []
 (A) (A) Linear networks only (B) Linear/Bilateral networks
 (C) Bilateral networks only (D) Neither of the two
3. Maximum power is transferred when load impedance is equal to []
 (A) Source resistance (B) Half of the source resistance
 (C) Zero (D) None of the above
4. Indicate the dual of the series network consisting of voltage source, capacitance and inductance in []
 (A) Parallel combination of resistance, capacitance and inductance
 (B) Series combination of current source, capacitance and inductance.
 (C) Parallel combination of current source, inductance and capacitance.
 (D) None of the above
5. Mesh analysis is based on []
 (A) KCL (B) KVL (C) Both (A)&(B) (D) None
6. A circuit consists of two resistances R_1 and R_2 are in parallel, then, the total current passing through the circuit is I_T . The current passing through R_1 is []
 (A) $I_T R_1 / (R_1 + R_2)$ (B) $I_T (R_1 + R_2) / R_1$ (C) $I_T R_2 / (R_1 + R_2)$ (D) $I_T (R_1 + R_2) / R_2$
7. The nodal method of circuit analysis is based on []
 (A) KVL and ohm's law (B) KCL and ohm's law (C) KCL and KVL (D) None of the above
8. When the power transferred to the load is maximum, the efficiency of power transfer is []
 (A) 25% (B) 75% (C) 50% (D) 100%
9. The formula for maximum power transferred to the load is []
 (A) $P = V^2 / 4R_L$ (B) $P = V^2 / R_L$ (C) $P = V^2 / 8R_L$ (D) $P = V^2 / 2R_L$
10. In Reciprocity theorem, the value of ratio of excitation to response is []
 (A) Zero (B) Constant (C) Half of the value (D) Twice the value
11. Which of the following theorems can be applied to any linear or non-linear, active or passive, time-variant or time-invariant? []
 (A) Thevenin's (B) Norton's (C) Tellegen's (D) Compensation

12. The common voltage across parallel branches with different voltage sources can be computed from the relation $V = (V_1 G_1 + V_2 G_2 + V_3 G_3) / (G_1 + G_2 + G_3)$. The above statement is associated with ----- theorem.
 (A) Thevenin's (B) Milliman's (C) Norton's (D) Reciprocity []
13. The theorem enables a number of voltage or current sources to be combined directly into a single voltage or current source is the ----- theorem. []
 (A) Thevenin's (B) Milliman's (C) Norton's (D) Reciprocity
14. Milliman's theorem yields equivalent []
 (A) impedance or resistance (B) current source (C) voltage source (D) voltage or current source
- A. closed path made by several branches of the network is known as []
 (A) branch (B) loop (C) circuit (D) junction
16. Kirchhoff's law is not applicable to circuits with []
 (A) lumped parameters (B) passive elements (C) distributed parameters
 (D) non-linear resistances
17. Kirchhoff's law is applicable to []
 (A) passive networks only (B) A.C circuits only (C) D.C circuits only (D) both A.C & D.C circuits.
18. For high efficiency of transfer of power, internal resistance of the source should be []
 (A) equal to load resistance (B) less than the load resistance
 (C) more than the load resistance (D) none of the above
19. For maximum transfer of power, internal resistance of the source should be []
 (A) (A) equal to load resistance (B) less than the load resistance
 (C) more than the load resistance (D) none of the above
20. The number of independent equations to solve a network is equal to []
 (A) the number of chords (B) the number of branches
 (C) sum of number of branches & chords (D) sum of number of branches, chords & nodes
21. The dual of current is []
 (A) voltage (B) resistance (C) capacitance (D) none
22. The dual of resistance is []
 (A) capacitance (B) inductance (C) conductance (D) none
23. The dual of the inductance is []
 (A) capacitance (B) inductance (C) conductance (D) none
24. The dual of the voltage source is []
 (A) current source (B) resistance (C) inductance (D) none
25. The loop existing around a current source, which is common to the two loops is called as []
 (A) super node (B) super mesh (C) mesh (D) none

26. Reference node is also known as []
 (A) datum node (B) zero potential node (C) both (A)&(B) (D) none
27. The unit of current is []
 (A) Amps (B)Volts (C)Coulombs/sec (D) none
28. The region surrounding a voltage source which connects two nodes directly is called []
 (A) super node (B)super mesh (C) node (D)none
29. According to Ohm's law, voltage is directly proportional to the []
 (A) resistance (B) current (C) capacitance (D) none
30. Ohm's law is applicable to []
 (A) Linear networks (B) Non-linear networks (C) Both (A) &(B) (D) none
31. In parallel circuit, which parameter is same? []
 (A) power (b) current (C) voltage (D) energy
32. In series circuit, which parameter is same? []
 (A) power (b) current (C) voltage (D) energy
33. Which of the following theorems is applicable for both linear and non-linear circuits? []
 (A) Reciprocity (B) Telligent's (C) Both (A)&(B) (D) None
34. Constant voltage source is []
 (A) active&bi-lateral (B) passive &bi-lateral
 (C) active and unilateral (D) passive and unilateral
35. Ideal voltage source have []
 (A) zero internal resistance (B) infinite internal resistance
 (C) low value of current (D)large value of emf
36. Ideal current source have []
 (A) zero internal resistance (B) infinite internal resistance
 (C) low value of current (D)large value of emf
37. A dependent source []
 (A) may be a current source or a voltage source (B) is always a voltage source
 (C) is always a current source (D) neither a current source or a voltage source
38. For determining the polarity of the voltage drop across the resistor ,it is necessary to know the []
 (A) value of resistor (B) direction of current flowing through the resistor
 (C) value of emf in the circuit (D) value of current
39. Kirchhoff's laws are not applicable to the circuits with []
 (A) distributed parameters (B) lumped parameters
 (c)passive elements (D) non-linear resistance
40. Kirchhoff's law is concerned with []
 (A) IR drop (B) battereyemf (C) junction voltage (D) both (A)&(B)

UNIT – II**RESONANCE AND FILTERS**

- 1) If the value of resonant frequency is 50 kHz in a series RLC circuit along with the bandwidth of about 1 kHz, then what would be the value of quality factor? []
 A) 5 B) 50 C) 100 D) 500
- 2) What will be the nature of impedance at a frequency below the anti resonant frequency? []
 A) Capacitive B) Inductive C) Reactive D) Resistive
- 3) What would be the value of impedance of a parallel resonant circuit at anti resonance condition?
 A) Resistive & maximum B) Resistive & minimum []
 C) Reactive & maximum D) Reactive & minimum
- 4) The current leads supply voltage if a series resonant circuit exhibits its operation _____ the resonant frequency []
 A) Above B) Below C) Equal To D) None Of The Above
- 5) If an a.c. signal generator drives a series RLC circuit, then the circuit undergoes resonance only due to variation in _____ []
 A) Supply voltage B) Series resistance C) Supply frequency D) Phase angle
- 6) How do the series resonant circuit behave under the resonance condition? []
 A) Current amplifier B) Transconductance C) Voltage regulator D) Voltage amplifier
- 7) Reactance curve is basically a graph of individual reactances versus _____ []
 A) Frequency B) Phase C) Amplitude D) Time period
- 8) Which among the following condition is true at the resonance? []
 A) $X_c > X_L$ B) $X_c = X_L$ C) $X_c < X_L$ D) None of the above
- 9) Which among the following get/s cancelled under the resonance condition in a.c. circuits, if inductive and capacitive reactances are in parallel? []
 A) Reactance B) Susceptance C) Resistance D) All of the above
- 10) What would be the value of power factor for series RLC circuit under the resonance phenomenon?
 A) 0 B) 0.5 C) 1 D) Infinity []
- 11) At low frequencies, the impedance of a series RLC circuit is []
 A) Capacitive. B) Resistive. C) Inductive. D) Can not be determined.
- 12) Naturally Parallel Resonance Circuit is a []
 A) Acceptor B) Rejecter C) Both A And B D) None
- 13) Power factor of a series RLC resonant circuit will be []
 A) 0.5. B) 0.85. C) Unity. D) Can not determined.

- 14) What is the applied voltage for a series RLC circuit when $I_T = 3 \text{ mA}$, $V_L = 30 \text{ V}$, $V_C = 18 \text{ V}$, and $R = 1000 \text{ ohms}$? []
 A) 3.00 V B) 12.37 V C) 34.98 V D) 48.00 V
- 15) In a parallel RLC circuit, which value may always be used as a vector reference []
 A) current B) reactance C) resistance D) voltage
- 16) How much current will flow in a 100 Hz series RLC circuit if $V_S = 20 \text{ V}$, $R_T = 66 \text{ ohms}$, and $X_T = 47 \text{ ohms}$? []
 A) 1.05 A B) 303 mA C) 247 mA D) 107 mA
- 17) What is the range between f_1 and f_2 of an RLC circuit that resonates at 150 kHz and has a Q of 30?
 A) 100.0 kHz to 155.0 kHz B) 147.5 kHz to 152.5 kHz []
 C) 4500 kHz to 295.5 kHz D) 149,970 Hz to 150,030 Hz
- 18) What effect will a parallel tank have upon final filter current? []
 A) very little B) The bandpass frequencies will change.
 C) The frequency cutoff will change. D) The impedance will block output.
- 19) A certain series resonant circuit has a bandwidth of 2 kHz. If the existing coil is replaced with one having a higher value of Q , the bandwidth will []
 A) decrease B) remain the same C) increase D) be less selective
- 20) If the resistance in parallel with a parallel resonant circuit is reduced, the bandwidth []
 A) decreases B) increases C) becomes sharper D) disappears
- 21) In a certain series resonant circuit, $V_C = 125 \text{ V}$, $V_L = 125 \text{ V}$, and $V_R = 40 \text{ V}$. The value of the source voltage is []
 A) 40 V B) 250 V C) 290 V D) 125 V
- 22) In a series RLC circuit that is operating above the resonant frequency, the current []
 A) is zero B) lags the applied voltage
 C) leads the applied voltage D) is in phase with the applied voltage
- 23) Plot of gain versus frequency is called []
 A) frequency response B) time response C) amplitude response D) altitude response
- 24) Filter that passes high frequencies and rejects low frequencies is called []
 A) Highpass filter B) Lowpass filter C) Bandpass filter D) Active filter
- 25) In a certain parallel resonant band-pass filter, the resonant frequency is 14 kHz. If the bandwidth is 4 kHz, the lower frequency []
 A) is 7 kHz B) is 10 kHz C) is 12 kHz D) cannot be determined
- 26) In a series resonant band-pass filter, a lower value of Q results in []
 A) a higher resonant frequency B) a smaller bandwidth

- C) a higher impedance D) a larger bandwidth
- 27) The maximum output voltage of a certain low-pass filter is 15 V. The output voltage at the critical frequency is []
 A) 0 V B) 15 V C) 10.60 V D) 21.21 V
- 28) An RL high-pass filter consists of a 470 resistor and a 600 mH coil. The output is taken across the coil. The circuit's critical frequency is []
 A) 125 Hz B) 1,250 Hz C) 564 Hz D) 5,644 Hz
- 29) An RC low-pass filter consists of a 120 resistor and a 0.002 F capacitor. The output is taken across the capacitor. The circuit's critical frequency is []
 A) 333 kHz B) 633 kHz C) 331 kHz D) 60 kHz
- 30) In a certain low-pass filter, $f_c = 3.5$ kHz. Its passband is []
 A) 0 Hz to 3.5 kHz B) 0 Hz C) 3.5 kHz D) 7 kHz
- 31) An R-C coupled circuit is a high pass filter for pulsating d.c. voltage because []
 A) C has high reactance for high-voltages B) C blocks d.c. voltages
 C) C has low reactance for low voltages D) None of the above
- 32) Which of the following statement is true? []
 A) L-type filter with series C and shunt L is low pass filter
 B) π -type filter with series C and shunt L is low pass filter
 C) T-type filter with series C and shunt L is low pass filter
 D) L-type filter with series C and Shunt C is low pass filter
- 33) In a series resonant band-pass filter, a lower value of Q results in []
 A) a higher resonant frequency B) a smaller bandwidth
 C) a higher impedance D) a larger bandwidth
- 34) At a certain frequency, the output voltage of a filter is 6 V and the input is 12 V. the filter's bandwidth is []
 A) 53 Hz B) 530 Hz C) 106 Hz D) 11.5 Hz
- 35) At a certain frequency, the output voltage of a filter is 6 V and the input is 12 V. The voltage ratio in decibels is []
 A) 6.02 dB B) -6.02 dB C) -12.04 dB D) 12.04 dB
- 36) Which filter attenuates any frequency outside the pass band? []
 A) Band-pass filter B) Band-reject filter C) low pass filter D) All of the mentioned
- 37) Find the center frequency of wide band-pass filter []
 A) $f_c = \sqrt{f_h \times f_L}$ B) $f_c = \sqrt{f_h + f_L}$ C) $f_c = \sqrt{f_h - f_L}$ D) $f_c = \sqrt{f_h / f_L}$
- 38) Which filter attenuates frequency between f_1 and f_2 is called -----? []
 A) Band-pass filter B) Band-reject filter C) low pass filter D) All of the mentioned
- 39) Quality factor is also known as []
 A) Voltage Magnification Factor B) Current Magnification Factor
 C) Both A And B D) None Of The Above
- 40) One Decibel = -----Neper []
 A) 0 B) 0.115 C) 1 D) 0.5

UNIT-III **TRANSIENT ANALYSIS**

1. Transient behaviour occurs in any circuit when []
 A) There are sudden changes of applied voltages B) the voltage source is shorted
 C) The circuit is connected or disconnected from the supply D) ALL
2. The transient response occurs []
 A) Only in resistance circuit B) only in inductive circuits
 C) Only in capacitive circuits D) both B & C
3. In steady state current and voltages _____ []
 A) Changes w.r.t to time B) doesn't change w.r.t time
 C) both A & B D) none
4. In transient state current and voltages _____ []
 A) Changes w.r.t to time B) doesn't change w.r.t time
 C) both A & B D) none
5. Inductor doesn't allow sudden changes in []
 A) Currents B) voltages C) Both A & B D) none
6. Capacitor doesn't allow sudden changes in []
 A) Currents B) voltages C) Both A & B D) none
7. Inductor allows sudden changes in []
 A) Currents B) voltages C) Both A & B D) none
8. Capacitor allows sudden changes []
 A) Currents B) voltages C) Both A & B D) none
9. The time constant of series RL circuit is []
 A) LR B) L/R C) R/L D) ALL
10. The time constant of series RC circuit is []
 A) $1/RC$ B) R/C C) RC D) ALL
11. L/R is time constant of which of the following circuit []
 A) Parallel RC circuit B) series RC circuit
 C) Series RL circuit D) parallel RL circuit
12. RC is time constant of which of the following circuit []
 A) Parallel RC circuit B) series RC circuit
 C) Series RL circuit D) parallel RL circuit
13. When series RL circuit is connected to a voltage source V at $t=0$, the current passing through the inductor L at $t=0^+$ is []
 A) V/R B) infinity
 C) Zero D) V/L
14. When series RL circuit is connected to a voltage source V at $t=0$, the current passing through the inductor L at $t=\infty$ is []
 A) V/R B) Infinity C) Zero D) V/L

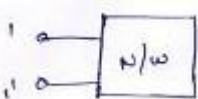
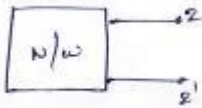

15. When series RC circuit is connected to a voltage source V at $t=0$, the current passing through the capacitor C at $t=0^+$ is []
 A) Infinity B) zero C) V/R D) V/WC
16. When series RC circuit is connected to a voltage source V at $t=0$, the current passing through the capacitor C at $t=\infty$ is []
 A) Infinity B) zero C) V/R D) V/WC
17. When series RC ($R=10\Omega, C=2\mu F$) circuit is connected to a voltage source V at $t=0$, what is the time constant of the network []
 A) 2 ms B) 2 μs C) 0.02 ms D) 0.2 μs
18. When series RL ($R=10\Omega, L=5mH$) circuit is connected to a voltage source V at $t=0$, what is the time constant of the network []
 A) 50 ms B) 50 μs C) 0.5 ms D) 5 μs
19. When series RC ($R=10\Omega, C=10\mu F$) circuit is connected to a voltage source V at $t=0$, the current passing through the capacitor C at $t=0.1ms$ is []
 A) Infinity B) zero C) V/R D) $0.63V/R$
20. When series RL ($R=10\Omega, L=10mH$) circuit is connected to a voltage source V at $t=0$, the current passing through the inductor L at $t=0.1s$ is []
 A) Infinity B) zero C) V/R D) $0.63V/R$
21. The transient current in an RLC circuit is over damped when []
 A) — — B) — — — — D) None
22. The transient current in an RLC circuit is under damped when []
 A) — — B) — — C) — — D) None
23. The transient current in an RLC circuit is critically damped when []
 A) — — B) — — C) — — D) None
24. If — — condition gives _____ response in RLC series circuit []
 A) over damped B) under damped C) critically damped D) none
25. If — — condition gives _____ response in RLC series circuit []
 A) over damped B) under damped C) critically damped D) none
26. If — — condition gives _____ response in RLC series circuit []
 A) over damped B) under damped C) critically damped D) none
27. The Laplace transform analysis gives []
 A) The time domain response only B) frequency response only C) Both A & B D) NONE
28. The laplace transform of a unit step function is []
 A) $1/S$ B) 1 C) $1/$ D) —
29. The laplace transform of a unit ramp function is []
 C) $1/S$ B) 1 C) $1/$ D) —
30. The laplace transform of the first derivative of a function $f(t)$ is []
 A) $F(S)/S$ B) $SF(S)-F(0)$ C) $SF(S)-F(0)$ D) $F(0)$
31. The laplace transform of the integral of a function $f(t)$ is []
 A) $F(S)/S$ B) $SF(S)-F(0)$ C) $SF(S)-F(0)$ D) $F(0)$

32. Laplace transform of the function e^{-20t} is []
 _____ B) $s+20$ C) _____ D) _____
33. Laplace transform of $\cos 2t$ []
 _____ B)) _____ C) _____ D) _____
34. Laplace transform of $\sin 4t$ []
 A) _____ B) _____ C) _____ D) _____
35. The laplace transform of $e^{5t}f(t)$ is []
 A) $F(s)$ B) $F(S-1)$ C) $F(S/5)$ D) $F(S-5)$
36. The inverse transform of _____ is []
 A) 3 B) t^3 C) t^2 D) $3t$
37. The inverse laplace of _____ is []
 C) A) $2(t+3)$ B) $2e^{-3t}$ C) e^{-3t} D) $2e^{-t}$
38. Laplace transform of damped sinewave $e^{-3t} \sin 50t$ is []
 A) _____ B) _____ C) _____ D) _____
39. The initial value of _____ is []
 A) 2 B) infinity C) zero D) 1
40. The initial value of $20-10t-e^{-25t}$ is []
 A) 20 B) 19 C) 10 D) 25

UNIT – IV

TWO PORT NETWORKS

1. Which parameters are widely used in transmission line theory []
A) Z parameters B) Y parameters C) ABCD parameters D) h parameters
2. For a two port network to be reciprocal []
A) $Z_{11} = Z_{22}$ B) $h_{21} = -h_{12}$ C) $Y_{21} = Y_{12}$ D) $AD - BC = 0$
3. The h parameters h_{11} and h_{12} are obtained []
A) by shorting the output terminals B) by opening input terminals
C) by shorting input terminals D) by opening output terminals
4. Two ports containing sources in their branches are called []
A) passive ports B) two ports C) active ports D) none
5. In Z parameter V_1, V_2 are []
A) Independent variables B) dependent variables C) both A and B D) none
6. Which of the parameters widely used in transmission line theory []
A) Z parameters B) ABCD parameters C) Y parameters D) H parameters
7. Which of the following is two port network []

- A)  B)  C)  D) None

8. In Z parameters are also called as []
A) short circuit admittance parameters B) short circuit impedance parameters
C) open circuit impedance parameters D) open circuit admittance parameters
9. In Y parameter I_1, I_2 are []
Dependent variables B) Independent variables C) Both A & B D) None
10. In describing the transmission parameters []
A) The input voltage and current are expressed in terms of output voltage and current
B) The input voltage and output voltage are expressed in terms of output current and input current
C) The input voltage and output current expressed in terms of input current and output voltage
D) none
11. If the two port network is reciprocal then []
A) $Y_{11} = Y_{22}$ B) $Y_{12} = Y_{22}$ C) $Y_{12} = Y_{11}$ D) $Y_{12} = Y_{21}$
12. Y parameters are also called as []
A) Short circuit admittance parameters B) short circuit impedance parameters
C) Open circuit admittance parameters D) open circuit impedance parameters
13. Which parameters are widely used in transmission line theory []
A) Z parameters B) Y parameters C) ABCD parameters D) H parameters
14. Y parameters are also called as []
A) Short circuit admittance parameters B) short circuit impedance parameters
C) Open circuit admittance parameters D) open circuit impedance parameters
15. Two ports containing sources in their branches are called []
A) Passive ports B) two ports C) active ports D) none
16. If the two port network is reciprocal then []
A) $Z_{11} = Z_{22}$ B) $Z_{12} = Z_{21}$ C) $Z_{11} = Z_{12}$ D) All

17. If the two port network is reciprocal then []
 A) $Y_{11} = Y_{22}$ B) $Y_{12} = Y_{22}$ C) $Y_{12} = Y_{11}$ D) $Y_{12} = Y_{21}$
18. Y parameters are also called as []
 A) Short circuit admittance parameters B) short circuit impedance parameters
 C) Open circuit admittance parameters D) open circuit impedance parameters
19. Transmission parameters are also called as []
 A) Y parameters B) General circuit parameters C) H parameters D) z parameters
20. A Two port network is simply a network inside a blackbox, and the network has only []
 A) Two terminals B) two pair of terminals C) two pair of ports D) two pair of accessible terminals
21. The no. of possible combinations generated by four variable taken two at a time in two-port network is []
 A) 6 B) 3 C) 2 D) 5
22. If the two port network is reciprocal then []
 A) $Z_{11} = Z_{22}$ B) $Z_{12} = Z_{21}$ C) $Z_{11} = Z_{12}$ D) All
23. In Y parameters I_1, I_2 are []
 A) Independent variables B) dependent variables C) both A and B D) none
24. In Y parameters V_1, V_2 are []
 A) Independent variables B) dependent variables C) both A and B D) none
25. In ABCD parameters V_1, I_1 are []
 A) Independent variables B) dependent variables C) both A and B D) none
26. In ABCD parameters V_2, I_2 are []
 A) Independent variables B) dependent variables C) both A and B D) none
27. If z-parameters are $z_{11} = 40, z_{22} = 50$ and $z_{12} = z_{21} = 20$, what would be the value of y_{22} in the matrix form of y-parameters given below?

$$\begin{bmatrix} \frac{5}{160} & -\frac{2}{160} \\ -\frac{2}{160} & ? \end{bmatrix}$$

- A) 4 / 160 B) 5 / 160 C) 10 / 160 D) 15 / 150 []
- 28) If the two ports are connected in cascade configuration, then which arithmetic operation should be performed between the individual transmission parameters in order to determine overall transmission parameters? []
 A) Addition B) Subtraction C) Multiplication D) Division
- 29) Which among the following represents the precise condition of reciprocity for transmission parameters? []
 A) $AB - CD = 1$ B) $AD - BC = 1$ C) $AC - BD = 1$ D) None of the above
- 30) Which is the correct condition of symmetry observed in z-parameters? []
 A) $z_{11} = z_{22}$ B) $z_{11} = z_{12}$ C) $z_{12} = z_{22}$ D) $z_{12} = z_{21}$
- 31) An open circuit reverse voltage gain in h-parameters is a unitless quantity and generally equivalent to ____ []
 A) V_1 / I_1 (keeping $V_2 = 0$) B) I_2 / I_1 (keeping $V_2 = 0$) C) V_1 / V_2 (keeping $I_1 = 0$)
 D) I_2 / V_2 (keeping $I_1 = 0$)
32. In the circuit shown below, the network N is described by the following Y matrix: $\square =$ [] The voltage gain $\square 2 / \square 1$ is []
 A) 1/90 B) -1/90 C) -1/99 D) -1/11
33. If the scattering matrix [S] of a two port network is [] = [] Then the network is

- A) Lossless and reciprocal B) Lossless but not reciprocal []
 C) Not lossless but reciprocal D) Neither lossless not reciprocal
- 34) For a 2-port network to be reciprocal, []
 A) $z_{11} = z_{22}$ B) $y_{21} = y_{12}$ C) $h_{21} = -h_{12}$ D) $AD - BC = 0$
- 35) Which is the correct condition of symmetry observed in y-parameters? []
 A) $y_{11} = y_{22}$ B) $y_{11} = y_{12}$ C) $y_{12} = y_{22}$ D) $y_{12} = y_{21}$
- 36) Which is the correct condition of symmetry observed in h-parameters? []
 A) $h_{11} = h_{22}$ B) $\Delta h = 1$ C) $h_{12} = h_{22}$ D) $h_{12} = -h_{21}$
- 37) Which is the correct condition of symmetry observed in T-parameters? []
 A) $A=B$ B) $\Delta T=1$ C) $A=D$ D) $A=C$
- 38) The h parameters h_{11} and h_{12} are obtained []
 B) by shorting the output terminals B) by opening input terminals
 C) by shorting input terminals D) by opening output terminals
- 39) Which parameters is Known as chain parameters []
 A) Z parameters B) Y parameters C) ABCD parameters D) H parameters
- 40) If the two port network is reciprocal then []
 A) $Y_{11} = Y_{22}$ B) $Y_{12} = Y_{22}$ C) $Y_{12} = Y_{11}$ D) $Y_{12} = Y_{21}$

UNIT – V

FOURIER TRANSFORMS

1. Fourier series for the signal e^{-at} does not exist if []
 A) $a > 0$ B) $a < 0$ C) $a = 1$ D) $a < 0$
2. The Fourier transform []
 A) satisfies linearity B) does not satisfies linearity C) both A & B D) none
3. What is the spectrum of a dc signal []
 A) 0 B) π C) 2π D) $2\pi\delta(\omega)$
5. The Fourier exist, if the following condition is satisfied []
 A) $\int_{-\infty}^{\infty} |f(t)| dt$ transform B) $\int_{-\infty}^{\infty} |f(t)| dt < \infty$ C) $\int_{-\infty}^{\infty} |f(t)| dt = 0$ D) none
6. Inverse Fourier transform of $\delta(\omega - \omega_0)$ []
 A) $1/2\pi e^{j\omega_0 t}$ B) $1/2\pi$ C) $e^{j\omega_0 t}$ D) $e^{j\omega t}$
7. The Fourier transform of signal $x(t)$ is []
 A) $-x(\omega)$ B) $x(-\omega)$ C) $-x(-\omega)$ D) $x(\omega)$
8. The Fourier transform of $\sin(t)$ function is []
 A) $2/j\omega$ B) $-2/j\omega$ C) $j\omega$ D) $2j\omega$
9. Time convolution property states that []
 A) $F_1(t) * F_2(t)$ B) $F_1(t)F_2(t)$ C) $F_1(\omega) * F_2(\omega)$ D) $F_1(\omega)/F_2(\omega)$
10. The frequency convolution property states that []
 A) $F_1(t) * F_2(t)$ B) $F_1(t)F_2(t)$ C) $F_1(\omega) * F_2^*(\omega)$ D) $F_1(\omega)/F_2(\omega)$
11. In a periodic signal, The period T_0 is doubled, the fundamental frequency ω_0 in the spectrum becomes []
 A) Doubled B) halved C) Increased 4 times D) no change
12. Any periodic function can be expressed by a Fourier series when the function having []
 A) Infinite number of finite discontinuities in a period
 B) finite number of finite discontinuities in a period

- C) finite number of infinite discontinuities in a period
 D) Infinite number of infinite discontinuities in a period
14. A function is said to be even, if $x(t)$ is []
 A) $x(-t)$ B) $-x(t)$ C) $x(2t)$ D) $x(t)$
15. If $x(-t)=x(t)$ then the function is called []
 A) Odd function B) even function C) Both A & B D) none
16. If $x(-t)=-x(t)$ then the function is called []
 A) Odd function B) even function C) Both A & B D) none
17. Identify the even function []
 A) Cosine B) sine C) Both A&B D) none
18. Identify the odd function []
 A) Cosine B) sine C) Both A&B D) none
19. A periodic function $x(t)$ is said to have half wave symmetry if $x(t)$ is []
 A) $-x(t+ T/2)$ B) $x(t+ T/2)$ C) $-x(t- T/2)$ D) $x(t- T/2)$
20. The Fourier transform of a conjugate symmetric function is always []
 A) imaginary B) conjugate anti-symmetric C) real D) conjugate symmetric
21. The Fourier transform may be applied to []
 A) Non-periodic B) Periodic C) Both A and B D) Neither A or B
22. The Fourier transform of $u(t)$ is []
 A) $1/j\omega$ B) $j\omega$ C) $1/(1+ j\omega)$ D) $\pi\delta(\omega)+(1/j\omega)$
23. The Fourier transform of $e^{-at} u(t)$ is []
 A) $1/(a-j\omega)$ B) $1/(a+j\omega)$ C) $1/(a^2+\omega^2)$ D) $1/(a^2-\omega^2)$
24. The Fourier transform of $tx(t)$ is []
 A) B) $\frac{dX(j\omega)}{d\omega}$ C) $x(j\omega)/\omega$ D)
25. The Fourier transform of $e^{j\omega_0 t} x(t)$ is []
 A) $X(\omega+ \omega_0)$ B) $X(\omega_0)$ C) $X(\omega-\omega_0)$ D) $X(\omega/ \omega_0)$
26. The Fourier transform of $x^*(t)$ is []
 A) $X^*(\omega)$ B) $X^*(-\omega)$ C) $-X^*(\omega)$ D) $-X^*(-\omega)$
27. The Fourier transform of $dx(t)/dt$ is []
 A) $d\omega X(\omega)/d\omega$ B) $X(\omega)/\omega$ C) $j\omega X(\omega)$ D) $j\omega/X(\omega)$
28. The Fourier transform of $x(at)=$ []
 A) $\frac{1}{|a|} X\left(\frac{\omega}{a}\right)$ B) $\frac{1}{|a|} X(a\omega)$ C) $\frac{1}{|a|} X\left(\frac{a}{\omega}\right)$ D) $\frac{1}{|a|} X\left(\frac{\omega}{a}\right)$
29. The Fourier series may be applied to []
 A) Non-periodic B) Periodic C) Both A and B D) Neither A or B
30. Periodic signal are analyzed by using []
 A) Fourier series B) Fourier transforms C) Both A& D) none
31. Non-Periodic signal are analyzed by using []
 A) Fourier series B) Fourier transforms C) Both A&B D) none
32. If the signals can be represented by sum of the sinusoids whose frequencies are integral multiple of fundamental frequency is called []
 A) Non-periodic B) Periodic C) Both A and B D) Neither A or B

33. If the signals can be represented by sum of the sinusoids whose frequencies are not integral multiple of fundamental frequency is called []
 A) Non-periodic B) Periodic C) Both A and B D) Neither A or B
34. Fourier series can be represented as []
 A) Trigonometric form B) exponential form C) Both A & B D) none
35. Series coefficient a_0 in Fourier series can be calculated using []
 A) $\frac{1}{2\pi} \int_0^\pi x(t) d(\omega t)$ B) $\frac{1}{2\pi} \int_0^{2\pi} x(t) d(\omega t)$ C) $\frac{1}{2\pi} \int_\pi^{2\pi}$ D) $\frac{1}{2\pi} \int_{-\pi}^\pi x(t) d(\omega t)$
36. Series coefficient a_n in Fourier series can be calculated using []
 A) $\frac{1}{\pi} \int_0^\pi x(t) d(\omega t)$ B) $\frac{1}{\pi} \int_0^{2\pi} x(t) \cos n\omega t d(\omega t)$ C) $\frac{1}{\pi} \int_0^{2\pi} x(t) \sin n\omega t d(\omega t)$ D) $\frac{1}{\pi} \int_\pi^{2\pi} x(t) \cos n\omega t d(\omega t)$
37. Series coefficient b_n in Fourier series can be calculated using []
 A) $\frac{1}{\pi} \int_0^\pi x(t) d(\omega t)$ B) $\frac{1}{\pi} \int_0^{2\pi} x(t) \cos n\omega t d(\omega t)$ C) $\frac{1}{\pi} \int_0^{2\pi} x(t) \sin n\omega t d(\omega t)$ D) $\frac{1}{\pi} \int_\pi^{2\pi} x(t) \cos n\omega t d(\omega t)$
38. Which of the following is a periodic signal []
 A) $x(t)$ B) $x(t+T)$ C) $x(2t)$ D) $x(\omega)$
39. Parseval's identity states that $\int_{-\infty}^{\infty} |f(t)|^2 dt =$ []
 A) $\int_{-\infty}^{\infty}$ B) $\frac{1}{2\pi} \int_{-\infty}^{\infty} X_1(\omega) X_2^*(\omega) d\omega$ C) $\frac{1}{2\pi} \int_{-\infty}^{\infty} X_1^*(\omega) X_2(\omega) d\omega$ D) $\int_{-\infty}^{\infty}$
40. The Fourier transform of $x_1(n) * x_2(n)$ is []
 A) $X_1(\omega) X_2(\omega)$ B) $X_1(\omega) * X_2(\omega)$ C) $X_1(\omega) * X_2(\omega)$ D) Does not exist

Prepared By
R SIVA & M KALAIVANI